




## Possible Solutions


In the shapes shown below, identify the number of cylinders, cones, cubes, and spheres.



There are 4 cylinders which are identified with a  .

There are 3 cubes which are identified with a  .

There are 3 cones which are identified with a  .

There are 3 spheres which are identified with a  .